

<b>Question Paper Name :</b>	Group B 13 July 2025 Shift 3 Set A
<b>Subject Name :</b>	Group B
<b>Creation Date :</b>	2025-07-13 20:09:05
<b>Duration :</b>	120
<b>Total Marks :</b>	160
<b>Display Marks:</b>	Yes
<b>Share Answer Key With Delivery Engine :</b>	No
<b>Actual Answer Key :</b>	Yes
<b>Change Font Color :</b>	No
<b>Change Background Color :</b>	No
<b>Change Theme :</b>	No
<b>Help Button :</b>	No
<b>Show Reports :</b>	No
<b>Show Progress Bar :</b>	No

### **Group B**

<b>Group Number :</b>	1
<b>Group Id :</b>	6686223
<b>Group Maximum Duration :</b>	0
<b>Group Minimum Duration :</b>	120
<b>Show Attended Group? :</b>	No
<b>Edit Attended Group? :</b>	No
<b>Break time :</b>	0
<b>Group Marks :</b>	160

### **Language Proficiency**

<b>Section Id :</b>	6686227
<b>Section Number :</b>	1
<b>Section type :</b>	Online
<b>Mandatory or Optional :</b>	Mandatory
<b>Number of Questions :</b>	12
<b>Number of Questions to be attempted :</b>	12
<b>Section Marks :</b>	40
<b>Section Negative Marks :</b>	0.5
<b>Maximum Instruction Time :</b>	0
<b>Sub-Section Number :</b>	1
<b>Sub-Section Id :</b>	66862213
<b>Question Shuffling Allowed :</b>	No

**Read the passage carefully and answer the questions that follow choosing the most appropriate alternatives.**

The regular subjects of the school curriculum present themselves as potential reservoirs of values. Hidden in the structure and methodology of every discipline is a set of values, attitudes and dispositions which are characteristics of it. Science, for example, is associated with such values as free inquiry, commitment to truth, and Mathematics with such qualities of mind as logical thinking, neatness and precision. In a similar way, Literature and History have their own distinctive values covering socio-cultural dimensions. The correct teaching of a subject involves not only transmission of information but also inducing in the learners a set of values involved in each discipline. Teaching-learning of a subject cannot be neutral to the values that are integral to it.

**Sub questions**

Question Number : 1 Question Id : 668622166 Question Type : MCQ Option Shuffling : No Negative Marks Display Text : 1/4  
Correct Marks : 2 Wrong Marks : 0.5

**What is the major thrust in the passage?**

1. Importance of school subjects for developing attitude.
2. Teaching-learning process inside classrooms.
3. School subjects as the sources of value education.
4. Strategy for value-inculcation.

Question Number : 2 Question Id : 668622167 Question Type : MCQ Option Shuffling : No Negative Marks Display Text : 1/4  
Correct Marks : 2 Wrong Marks : 0.5

**Which of the following statements is not mentioned in the passage?**

1. Every subject has the scope for value education.
2. History develops the value of tolerance.
3. Precision is developed from Mathematics.
4. Science develops the spirit of inquiry.

Question Number : 3 Question Id : 668622168 Question Type : MCQ Option Shuffling : No Negative Marks Display Text : 1/4  
Correct Marks : 2 Wrong Marks : 0.5

**What is stated to be the most of important factor for value education?**

1. Potential value base in subjects.
2. Equal importance to each subject.
3. Appropriate transaction of each subject.
4. Inducing the values in the learners.

Question Number : 4 Question Id : 668622169 Question Type : MCQ Option Shuffling : No Negative Marks Display Text : 1/4  
Correct Marks : 2 Wrong Marks : 0.5

**Which of the following is not true according to the passage?**

1. Each subject is a reservoir of values.
2. Socio-cultural values are covered in literature.
3. Transaction of a subject must deal with values to be acquired.
4. Transaction of subjects aims at common set of values.

Question Number : 5 Question Id : 668622170 Question Type : MCQ Option Shuffling : No Negative Marks Display Text : 1/4  
Correct Marks : 2 Wrong Marks : 0.5

**Which of the following does not belong to the category of intellectual values?**

1. Logical thinking
2. Collaborative approach
3. Precise expression
4. Spirit of experimentation

**Read the passage carefully and answer the questions that follow choosing the most appropriate alternatives.**

The regular subjects of the school curriculum present themselves as potential reservoirs of values. Hidden in the structure and methodology of every discipline is a set of values, attitudes and dispositions which are characteristics of it. Science, for example, is associated with such values as free inquiry, commitment to truth, and Mathematics with such qualities of mind as logical thinking, neatness and precision. In a similar way, Literature and History have their own distinctive values covering socio-cultural dimensions. The correct teaching of a subject involves not only transmission of information but also inducing in the learners a set of values involved in each discipline. Teaching-learning of a subject cannot be neutral to the values that are integral to it.

**Sub questions**

Question Number : 1 Question Id : 668622166 Question Type : MCQ Option Shuffling : No Negative Marks Display Text : 1/4  
Correct Marks : 2 Wrong Marks : 0.5

**What is the major thrust in the passage?**

1. Importance of school subjects for developing attitude.
2. Teaching-learning process inside classrooms.
3. School subjects as the sources of value education.
4. Strategy for value-inculcation.

Question Number : 2 Question Id : 668622167 Question Type : MCQ Option Shuffling : No Negative Marks Display Text : 1/4  
Correct Marks : 2 Wrong Marks : 0.5

**Which of the following statements is not mentioned in the passage?**

1. Every subject has the scope for value education.
2. History develops the value of tolerance.
3. Precision is developed from Mathematics.
4. Science develops the spirit of inquiry.

Question Number : 3 Question Id : 668622168 Question Type : MCQ Option Shuffling : No Negative Marks Display Text : 1/4  
Correct Marks : 2 Wrong Marks : 0.5

**What is stated to be the most of important factor for value education?**

1. Potential value base in subjects.
2. Equal importance to each subject.
3. Appropriate transaction of each subject.
4. Inducing the values in the learners.

Question Number : 4 Question Id : 668622169 Question Type : MCQ Option Shuffling : No Negative Marks Display Text : 1/4  
Correct Marks : 2 Wrong Marks : 0.5

**Which of the following is not true according to the passage?**

1. Each subject is a reservoir of values.
2. Socio-cultural values are covered in literature.
3. Transaction of a subject must deal with values to be acquired.
4. Transaction of subjects aims at common set of values.

Question Number : 5 Question Id : 668622170 Question Type : MCQ Option Shuffling : No Negative Marks Display Text : 1/4  
Correct Marks : 2 Wrong Marks : 0.5

**Which of the following does not belong to the category of intellectual values?**

1. Logical thinking
2. Collaborative approach
3. Precise expression
4. Spirit of experimentation

Sub-Section Number :

2

Sub-Section Id :

66862214

Question Shuffling Allowed :

Yes

Question Number : 6 Question Id : 668622171 Question Type : MCQ Option Shuffling : No Negative Marks Display Text : 1/4  
Correct Marks : 2 Wrong Marks : 0.5

**“Many athletes eschew unhealthy foods to maintain peak performance.”**

**Based on the context, what does “eschew” mean in the sentence?**

1. enjoy
2. avoid
3. promote
4. consume

Question Number : 6 Question Id : 668622171 Question Type : MCQ Option Shuffling : No Negative Marks Display Text : 1/4  
Correct Marks : 2 Wrong Marks : 0.5

**“Many athletes eschew unhealthy foods to maintain peak performance.”**

**Based on the context, what does “eschew” mean in the sentence?**

1. enjoy
2. avoid
3. promote
4. consume

Question Number : 7 Question Id : 668622172 Question Type : MCQ Option Shuffling : No Negative Marks Display Text : 1/4  
Correct Marks : 2 Wrong Marks : 0.5

**What is the opposite of “diligent”?**

1. hardworking
2. interesting
3. indolence
4. industrious

Question Number : 7 Question Id : 668622172 Question Type : MCQ Option Shuffling : No Negative Marks Display Text : 1/4  
Correct Marks : 2 Wrong Marks : 0.5

**What is the opposite of “diligent”?**

1. hardworking
2. interesting
3. indolence
4. industrious

Question Number : 8 Question Id : 668622173 Question Type : MCQ Option Shuffling : No Negative Marks Display Text : 1/4  
Correct Marks : 2 Wrong Marks : 0.5

**“Difficulties are excuses that history never accept.” Which among the following options will make the sentence correct?**

1. “Difficulties” should be “Difficulty”
2. “excuses” should be “excuse”
3. “accept” should be “accepts”
4. All the above options are correct.

Question Number : 8 Question Id : 668622173 Question Type : MCQ Option Shuffling : No Negative Marks Display Text : 1/4  
Correct Marks : 2 Wrong Marks : 0.5

**“Difficulties are excuses that history never accept.” Which among the following options will make the sentence correct?**

1. “Difficulties” should be “Difficulty”
2. “excuses” should be “excuse”
3. “accept” should be “accepts”
4. All the above options are correct.

Question Number : 9 Question Id : 668622174 Question Type : MCQ Option Shuffling : No Negative Marks Display Text : 1/4  
Correct Marks : 2 Wrong Marks : 0.5

**Choose the correct sentence.**

1. Neither the teacher nor the students knows the answer.
2. Neither the teacher nor the students know the answer.
3. Neither the student nor the teachers knows the answer.
4. Neither the students nor the teacher know the answer.

Question Number : 9 Question Id : 668622174 Question Type : MCQ Option Shuffling : No Negative Marks Display Text : 1/4  
Correct Marks : 2 Wrong Marks : 0.5

**Choose the correct sentence.**

1. Neither the teacher nor the students knows the answer.
2. Neither the teacher nor the students know the answer.
3. Neither the student nor the teachers knows the answer.
4. Neither the students nor the teacher know the answer.

Question Number : 10 Question Id : 668622175 Question Type : MCQ Option Shuffling : No Negative Marks Display Text : 1/4  
Correct Marks : 2 Wrong Marks : 0.5

**Which sentence maintains correct tense and time sequence?**

1. By the time he arrived, the movie already started.
2. By the time he arrived, the movie has already started.
3. By the time he arrived, the movie had already started.
4. By the time he arrived, the movie was already starting.

**Which sentence maintains correct tense and time sequence?**

1. By the time he arrived, the movie already started.
2. By the time he arrived, the movie has already started.
3. By the time he arrived, the movie had already started.
4. By the time he arrived, the movie was already starting.

Sub-Section Number :

3

Sub-Section Id :

66862215

Question Shuffling Allowed :

No

**Read the passage below and answer the questions that follow:**

Liam had always admired the vintage record store on Maple Avenue. Its neon sign and retro vibe made it stand out from the modern shops around it. One sunny afternoon, he decided to step inside. As Liam entered, he was greeted by the sound of classic rock tunes playing softly in the background. Rows of vinyl records lined the walls, each one a piece of musical history. He browsed through the collection, amazed by the variety of genres and artists available. Lost in his exploration, Liam did not notice the store owner, Mrs. Davis, watching him from behind the counter. "Looking for something specific?" she asked, breaking his reverie. Startled, Liam looked up and smiled, "Just browsing, thank you." Mrs. Davis chuckled, "Ah, the thrill of discovering new music without knowing what you're looking for. It never gets old." They began chatting about music, sharing their favorite albums and artists. Mrs. Davis, a music enthusiast for over thirty years, had a wealth of knowledge to share. Liam left the store with a vinyl record in hand and a new appreciation for the timeless appeal of classic music.

**Sub questions**

Question Number : 11 Question Id : 668622177 Question Type : MCQ Option Shuffling : No Negative Marks Display Text : 1/4  
Correct Marks : 2 Wrong Marks : 0.5

**What attracted Liam to the vintage record store on Maple Avenue?**

1. Its modern design
2. Its location on a busy street
3. Its neon sign and retro vibe
4. Its variety of modern music

Question Number : 12 Question Id : 668622178 Question Type : MCQ Option Shuffling : No Negative Marks Display Text : 1/4  
Correct Marks : 2 Wrong Marks : 0.5

**What greeted Liam when he entered the record store?**

1. Classical music
2. Jazz tunes
3. Classic rock tunes
4. Pop music

Question Number : 13 Question Id : 668622179 Question Type : MCQ Option Shuffling : No Negative Marks Display Text : 1/4  
Correct Marks : 2 Wrong Marks : 0.5

**Who was watching Liam from behind the counter?**

1. A fellow customer
2. Mrs. Davis, the store owner
3. A store assistant
4. A musician

Question Number : 14 Question Id : 668622180 Question Type : MCQ Option Shuffling : No Negative Marks Display Text : 1/4  
Correct Marks : 2 Wrong Marks : 0.5

**What did Mrs. Davis describe as “thrilling”?**

1. Listening to classical music
2. Discovering new music
3. Buying vinyl records
4. Playing instruments

Question Number : 15 Question Id : 668622181 Question Type : MCQ Option Shuffling : No Negative Marks Display Text : 1/4  
Correct Marks : 2 Wrong Marks : 0.5

**What did Liam leave the store with?**

1. A CD and a vintage record
2. A cassette tape
3. A vinyl record
4. A music magazine

**Read the passage below and answer the questions that follow:**

Liam had always admired the vintage record store on Maple Avenue. Its neon sign and retro vibe made it stand out from the modern shops around it. One sunny afternoon, he decided to step inside. As Liam entered, he was greeted by the sound of classic rock tunes playing softly in the background. Rows of vinyl records lined the walls, each one a piece of musical history. He browsed through the collection, amazed by the variety of genres and artists available. Lost in his exploration, Liam did not notice the store owner, Mrs. Davis, watching him from behind the counter. "Looking for something specific?" she asked, breaking his reverie. Startled, Liam looked up and smiled, "Just browsing, thank you." Mrs. Davis chuckled, "Ah, the thrill of discovering new music without knowing what you're looking for. It never gets old." They began chatting about music, sharing their favorite albums and artists. Mrs. Davis, a music enthusiast for over thirty years, had a wealth of knowledge to share. Liam left the store with a vinyl record in hand and a new appreciation for the timeless appeal of classic music.

**Sub questions**

Question Number : 11 Question Id : 668622177 Question Type : MCQ Option Shuffling : No Negative Marks Display Text : 1/4  
Correct Marks : 2 Wrong Marks : 0.5

**What attracted Liam to the vintage record store on Maple Avenue?**

1. Its modern design
2. Its location on a busy street
3. Its neon sign and retro vibe
4. Its variety of modern music

Question Number : 12 Question Id : 668622178 Question Type : MCQ Option Shuffling : No Negative Marks Display Text : 1/4  
Correct Marks : 2 Wrong Marks : 0.5

**What greeted Liam when he entered the record store?**

1. Classical music
2. Jazz tunes
3. Classic rock tunes
4. Pop music

Question Number : 13 Question Id : 668622179 Question Type : MCQ Option Shuffling : No Negative Marks Display Text : 1/4  
Correct Marks : 2 Wrong Marks : 0.5

**Who was watching Liam from behind the counter?**

1. A fellow customer
2. Mrs. Davis, the store owner
3. A store assistant
4. A musician

Question Number : 14 Question Id : 668622180 Question Type : MCQ Option Shuffling : No Negative Marks Display Text : 1/4  
Correct Marks : 2 Wrong Marks : 0.5

**What did Mrs. Davis describe as “thrilling”?**

1. Listening to classical music
2. Discovering new music
3. Buying vinyl records
4. Playing instruments

Question Number : 15 Question Id : 668622181 Question Type : MCQ Option Shuffling : No Negative Marks Display Text : 1/4  
Correct Marks : 2 Wrong Marks : 0.5

**What did Liam leave the store with?**

1. A CD and a vintage record
2. A cassette tape
3. A vinyl record
4. A music magazine

Sub-Section Number :

4

Sub-Section Id :

66862216

Question Shuffling Allowed :

Yes

Question Number : 16 Question Id : 668622182 Question Type : MCQ Option Shuffling : No Negative Marks Display Text : 1/4  
Correct Marks : 2 Wrong Marks : 0.5

**Which of the following is the most appropriate meaning of the sentence:**

**“It’s not rocket science”?**

1. It’s very critical.
2. It’s not difficult.
3. It’s not immoral.
4. It’s not meant for children.

Question Number : 16 Question Id : 668622182 Question Type : MCQ Option Shuffling : No Negative Marks Display Text : 1/4  
Correct Marks : 2 Wrong Marks : 0.5

**Which of the following is the most appropriate meaning of the sentence:**

**“It’s not rocket science”?**

1. It’s very critical.
2. It’s not difficult.
3. It’s not immoral.
4. It’s not meant for children.

Question Number : 17 Question Id : 668622183 Question Type : MCQ Option Shuffling : No Negative Marks Display Text : 1/4  
Correct Marks : 2 Wrong Marks : 0.5

**Choose the phrase that provides correct meaning to the sentence: “If you are always \_\_\_\_\_, you will never know how amazing you can be.”**

1. try to be normal.
2. trying to be normal.
3. try to being normal.
4. trying to being normal.

Question Number : 17 Question Id : 668622183 Question Type : MCQ Option Shuffling : No Negative Marks Display Text : 1/4  
Correct Marks : 2 Wrong Marks : 0.5

**Choose the phrase that provides correct meaning to the sentence: “If you are always \_\_\_\_\_, you will never know how amazing you can be.”**

1. try to be normal.
2. trying to be normal.
3. try to being normal.
4. trying to being normal.

Question Number : 18 Question Id : 668622184 Question Type : MCQ Option Shuffling : No Negative Marks Display Text : 1/4  
Correct Marks : 2 Wrong Marks : 0.5

**Which word is a synonym for “ephemeral”?**

1. Permanent
2. Enduring
3. Everlasting
4. Momentary

Question Number : 18 Question Id : 668622184 Question Type : MCQ Option Shuffling : No Negative Marks Display Text : 1/4  
Correct Marks : 2 Wrong Marks : 0.5

**Which word is a synonym for “ephemeral”?**

1. Permanent
2. Enduring
3. Everlasting
4. Momentary

Question Number : 19 Question Id : 668622185 Question Type : MCQ Option Shuffling : No Negative Marks Display Text : 1/4  
Correct Marks : 2 Wrong Marks : 0.5

**Which of the following is the most polite way of rewriting the sentence:**

**“Send me the report by tomorrow”?**

1. Could you please send me the report by tomorrow?
2. Please send me the report by tomorrow.
3. I may appreciate it if you send me the report by tomorrow.
4. Kindly send me the report by tomorrow.

Question Number : 19 Question Id : 668622185 Question Type : MCQ Option Shuffling : No Negative Marks Display Text : 1/4  
Correct Marks : 2 Wrong Marks : 0.5

**Which of the following is the most polite way of rewriting the sentence:**

**“Send me the report by tomorrow”?**

1. Could you please send me the report by tomorrow?
2. Please send me the report by tomorrow.
3. I may appreciate it if you send me the report by tomorrow.
4. Kindly send me the report by tomorrow.

Question Number : 20 Question Id : 668622186 Question Type : MCQ Option Shuffling : No Negative Marks Display Text : 1/4  
Correct Marks : 2 Wrong Marks : 0.5

**Which of the following statements best reflects one’s “confidence”?**

1. I’m not sure, but I’ll try.
2. I might be able to handle it.
3. I can handle this task efficiently.
4. It’s probably beyond my abilities, but I’ll attempt it.

Question Number : 20 Question Id : 668622186 Question Type : MCQ Option Shuffling : No Negative Marks Display Text : 1/4  
Correct Marks : 2 Wrong Marks : 0.5

**Which of the following statements best reflects one's "confidence"?**

1. I'm not sure, but I'll try.
2. I might be able to handle it.
3. I can handle this task efficiently.
4. It's probably beyond my abilities, but I'll attempt it.

### **Teaching Aptitude**

Section Id :	6686228
Section Number :	2
Section type :	Online
Mandatory or Optional :	Mandatory
Number of Questions :	30
Number of Questions to be attempted :	30
Section Marks :	60
Section Negative Marks :	0.5
Maximum Instruction Time :	0
Sub-Section Number :	1
Sub-Section Id :	66862217
Question Shuffling Allowed :	Yes

Question Number : 21 Question Id : 668622187 Question Type : MCQ Option Shuffling : No Negative Marks Display Text : 1/4  
Correct Marks : 2 Wrong Marks : 0.5

**Which of the following is the primary purpose of assessment in schools?**

1. To improve students' learning
2. To categorise learners as either pass or fail
3. To inform parents about the performance of their wards
4. To make students work hard to raise their marks

Question Number : 21 Question Id : 668622187 Question Type : MCQ Option Shuffling : No Negative Marks Display Text : 1/4  
Correct Marks : 2 Wrong Marks : 0.5

विद्यालय में आकलन का मूल उद्देश्य क्या है?

1. विद्यार्थी के अधिगम का विकास करना
2. उत्तीर्ण या अनुत्तीर्ण के रूप में शिक्षार्थियों को वर्गीकृत करना
3. बच्चों की उपलब्धि के बारे में माता-पिता को सूचित करना
4. विद्यार्थियों के अंकों में वृद्धि करने के लिए उन्हें कठिन कार्य देना

Question Number : 22 Question Id : 668622188 Question Type : MCQ Option Shuffling : No Negative Marks Display Text : 1/4  
Correct Marks : 2 Wrong Marks : 0.5

Which of the following approaches maximise student learning?

1. Homogenous grouping
2. Heterogeneous grouping
3. Randomized grouping
4. Grouping by students' interest

Question Number : 22 Question Id : 668622188 Question Type : MCQ Option Shuffling : No Negative Marks Display Text : 1/4  
Correct Marks : 2 Wrong Marks : 0.5

विद्यार्थियों के अधिगम को सर्वाधिक करने के लिए निम्न में से कौन-सा उपागम उपयुक्त है?

1. समस्तरीय वर्गीकरण
2. विषमस्तरीय वर्गीकरण
3. यादृच्छिक वर्गीकरण
4. विद्यार्थियों की रुचि अनुसार वर्गीकरण

Question Number : 23 Question Id : 668622189 Question Type : MCQ Option Shuffling : No Negative Marks Display Text : 1/4  
Correct Marks : 2 Wrong Marks : 0.5

Which of the following method is teacher-centric?

1. Cooperative learning
2. Project-based learning
3. Discovery learning
4. Expository learning

Question Number : 23 Question Id : 668622189 Question Type : MCQ Option Shuffling : No Negative Marks Display Text : 1/4

Correct Marks : 2 Wrong Marks : 0.5

निम्न में से कौन-सी विधि शिक्षक केन्द्रित है?

1. सहकारिता अधिगम
2. परियोजना आधारित अधिगम
3. आविष्कारमूलक अधिगम
4. अर्थ-प्रकाशक अधिगम

Question Number : 24 Question Id : 668622190 Question Type : MCQ Option Shuffling : No Negative Marks Display Text : 1/4  
Correct Marks : 2 Wrong Marks : 0.5

Which of the following documents should come first in the context of 'Education'?

1. Education Policy
2. Textbook
3. Syllabi
4. Curriculum Framework

Question Number : 24 Question Id : 668622190 Question Type : MCQ Option Shuffling : No Negative Marks Display Text : 1/4  
Correct Marks : 2 Wrong Marks : 0.5

शिक्षा के संदर्भ में निम्न में से कौन-सा पहले आता है?

1. शिक्षा नीति
2. पाठ्य-पुस्तक
3. पाठ्यक्रम
4. पाठ्यचर्या फ्रेमवर्क

Question Number : 25 Question Id : 668622191 Question Type : MCQ Option Shuffling : No Negative Marks Display Text : 1/4  
Correct Marks : 2 Wrong Marks : 0.5

Which of the characteristics of Teaching Learning Materials (TLMs) influence learning the most?

1. Color of the TLMs
2. Volume of the TLMs
3. Cost of the TLMs
4. Relevance of the TLMs

Question Number : 25 Question Id : 668622191 Question Type : MCQ Option Shuffling : No Negative Marks Display Text : 1/4  
Correct Marks : 2 Wrong Marks : 0.5

शिक्षण-अधिगम सामग्री (TLM) की कौन-सी विशेषता अधिगम को सर्वाधिक प्रभावित करती है?

1. TLM का रंग
2. TLM का आकार
3. TLM की कीमत
4. TLM की प्रासंगिकता

Question Number : 26 Question Id : 668622192 Question Type : MCQ Option Shuffling : No Negative Marks Display Text : 1/4  
Correct Marks : 2 Wrong Marks : 0.5

Generally the aims of education are stated in:

1. Textbooks
2. Syllabi
3. Education Policy
4. School Process

Question Number : 26 Question Id : 668622192 Question Type : MCQ Option Shuffling : No Negative Marks Display Text : 1/4  
Correct Marks : 2 Wrong Marks : 0.5

शिक्षा के उद्देश्य का उल्लेख किसमें मिलता है?

1. पाठ्य-पुस्तकों में
2. पाठ्यक्रम में
3. शिक्षा-नीति में
4. विद्यालय प्रक्रिया में

Question Number : 27 Question Id : 668622193 Question Type : MCQ Option Shuffling : No Negative Marks Display Text : 1/4  
Correct Marks : 2 Wrong Marks : 0.5

The most important consideration in curriculum development is:

1. needs and capabilities of students
2. ability level of teachers
3. cultural ethos of society
4. socio-political ideology

Question Number : 27 Question Id : 668622193 Question Type : MCQ Option Shuffling : No Negative Marks Display Text : 1/4  
Correct Marks : 2 Wrong Marks : 0.5

पाठ्यचर्या विकास में सर्वाधिक महत्वपूर्ण विचार कौन-सा है?

1. विद्यार्थियों की आवश्यकता और सामर्थ्य
2. शिक्षकों की दक्षता का स्तर
3. समाज के सांस्कृतिक मूल्य
4. सामाजिक-राजनीतिक आदर्श

Question Number : 28 Question Id : 668622194 Question Type : MCQ Option Shuffling : No Negative Marks Display Text : 1/4  
Correct Marks : 2 Wrong Marks : 0.5

The Aims of Education are mostly influenced by:

1. Educational Psychology
2. Economics of Education
3. History of Education
4. Educational Philosophy

Question Number : 28 Question Id : 668622194 Question Type : MCQ Option Shuffling : No Negative Marks Display Text : 1/4  
Correct Marks : 2 Wrong Marks : 0.5

शिक्षा का उद्देश्य किसके द्वारा अधिक प्रभावित होता है?

1. शिक्षा-मनोविज्ञान
2. शिक्षा की अर्थ-व्यवस्था
3. शिक्षा का इतिहास
4. शिक्षा-दर्शन

Question Number : 29 Question Id : 668622195 Question Type : MCQ Option Shuffling : No Negative Marks Display Text : 1/4  
Correct Marks : 2 Wrong Marks : 0.5

A teacher can foster creativity among children by:

1. praising creative work of students
2. displaying innovative works of students
3. allowing students to brainstorm solutions to problems
4. All of these

Question Number : 29 Question Id : 668622195 Question Type : MCQ Option Shuffling : No Negative Marks Display Text : 1/4  
Correct Marks : 2 Wrong Marks : 0.5

किस के जरिए शिक्षक विद्यार्थियों में सृजनशीलता को बढ़ावा दे सकेंगे ?

1. विद्यार्थी के सृजनात्मक कार्य की प्रशंसा करके
2. विद्यार्थी के अभिनव कार्य का प्रदर्शन करके
3. अपनी बुद्धि के प्रयोग से समस्याओं के समाधान करने को कहकर
4. उपर्युक्त सभी

Question Number : 30 Question Id : 668622196 Question Type : MCQ Option Shuffling : No Negative Marks Display Text : 1/4  
Correct Marks : 2 Wrong Marks : 0.5

If there is a visually challenged student in your class, you should primarily:

1. orient classroom teaching to cater to his/her needs
2. not give extra attention to her/him
3. arrange a seat in the front row
4. treat her/him at par with normal children

Question Number : 30 Question Id : 668622196 Question Type : MCQ Option Shuffling : No Negative Marks Display Text : 1/4  
Correct Marks : 2 Wrong Marks : 0.5

यदि आपकी कक्षा में दृष्टिबाधित विद्यार्थी है, तो आप प्रारम्भिक स्तर पर :

1. उसकी आवश्यकता की पूर्ति के लिए कक्षा में शिक्षण को अनुकूल बनाना
2. उसके प्रति अलग से ध्यान नहीं देंगे
3. उसके बैठने की व्यवस्था सामने की पंक्ति में करेंगे
4. उसके प्रति सामान्य विद्यार्थियों की तरह व्यवहार करेंगे

Question Number : 31 Question Id : 668622197 Question Type : MCQ Option Shuffling : No Negative Marks Display Text : 1/4  
Correct Marks : 2 Wrong Marks : 0.5

Which of the following methods is most suitable for enhancing skills?

1. Discussion
2. Demonstration
3. Recitation
4. Lecture

Question Number : 31 Question Id : 668622197 Question Type : MCQ Option Shuffling : No Negative Marks Display Text : 1/4  
Correct Marks : 2 Wrong Marks : 0.5

कौशल विकास के लिए निम्न में से कौन-सी विधि सर्वाधिक उपयुक्त है?

1. चर्चा
2. प्रदर्शन
3. आवृत्ति
4. व्याख्यान

Question Number : 32 Question Id : 668622198 Question Type : MCQ Option Shuffling : No Negative Marks Display Text : 1/4  
Correct Marks : 2 Wrong Marks : 0.5

Which of the following is the professional requirement of a teacher?

1. Mastery over the subject
2. Competency in teaching
3. Innovativeness in teaching strategies
4. All the above

Question Number : 32 Question Id : 668622198 Question Type : MCQ Option Shuffling : No Negative Marks Display Text : 1/4  
Correct Marks : 2 Wrong Marks : 0.5

निम्न में से कौन-सी शिक्षक की वृत्तिगत आवश्यकता है?

1. विषय पर अधिकार
2. शिक्षण में दक्षता
3. शिक्षण-पद्धति में नवीनता
4. उपर्युक्त सभी

Question Number : 33 Question Id : 668622199 Question Type : MCQ Option Shuffling : No Negative Marks Display Text : 1/4  
Correct Marks : 2 Wrong Marks : 0.5

The school development plan should be determined by:

1. Students and teachers
2. School Head and the teachers
3. School Management Committee
4. Educational administrators

Question Number : 33 Question Id : 668622199 Question Type : MCQ Option Shuffling : No Negative Marks Display Text : 1/4  
Correct Marks : 2 Wrong Marks : 0.5

विद्यालय विकास योजना किसके द्वारा निर्धारित होनी चाहिए?

1. शिक्षक और विद्यार्थियों द्वारा
2. विद्यालय के मुख्य और शिक्षकों द्वारा
3. विद्यालय के प्रबंधन समिति द्वारा
4. शैक्षिक प्रशासकों द्वारा

Question Number : 34 Question Id : 668622200 Question Type : MCQ Option Shuffling : No Negative Marks Display Text : 1/4  
Correct Marks : 2 Wrong Marks : 0.5

The best time for assessing student-learning is:

1. the beginning of the teaching-learning process
2. the end of the teaching-learning process
3. throughout the teaching-learning process
4. the end of the academic session

Question Number : 34 Question Id : 668622200 Question Type : MCQ Option Shuffling : No Negative Marks Display Text : 1/4  
Correct Marks : 2 Wrong Marks : 0.5

विद्यार्थियों के अधिगम-आकलन का सर्वोत्कृष्ट समय है :

1. शिक्षण-अधिगम प्रक्रिया के प्रारम्भ में
2. शिक्षण-अधिगम प्रक्रिया के अंत में
3. पूरे शिक्षण-अधिगम के दौरान
4. शैक्षिक सत्र के अंत में

Question Number : 35 Question Id : 668622201 Question Type : MCQ Option Shuffling : No Negative Marks Display Text : 1/4  
Correct Marks : 2 Wrong Marks : 0.5

Assessment of learning carried out at the end of a course is known as:

1. formative assessment
2. summative assessment
3. placement assessment
4. diagnostic assessment

Question Number : 35 Question Id : 668622201 Question Type : MCQ Option Shuffling : No Negative Marks Display Text : 1/4  
Correct Marks : 2 Wrong Marks : 0.5

पाठ्यक्रम की समाप्ति पर किए जाने वाले अधिगम-आकलन को क्या कहते हैं?

1. रचनात्मक आकलन
2. योगात्मक आकलन
3. कर्म-नियोजन आकलन
4. निदानात्मक आकलन

Question Number : 36 Question Id : 668622202 Question Type : MCQ Option Shuffling : No Negative Marks Display Text : 1/4  
Correct Marks : 2 Wrong Marks : 0.5

Sign language interpreter is a tool used for teaching children with:

1. hearing impairment
2. visual impairment
3. learning disorder
4. intellectual disability

Question Number : 36 Question Id : 668622202 Question Type : MCQ Option Shuffling : No Negative Marks Display Text : 1/4  
Correct Marks : 2 Wrong Marks : 0.5

संकेत भाषा का आशु-अनुवादक कौन-से बच्चों को पढ़ाने का एक साधन है?

1. श्रवण-बाधित
2. दृष्टि-बाधित
3. अधिगम-विकार/ अक्षमता
4. बुद्धिमत्ता में अक्षमता

Question Number : 37 Question Id : 668622203 Question Type : MCQ Option Shuffling : No Negative Marks Display Text : 1/4  
Correct Marks : 2 Wrong Marks : 0.5

Which of the following is not a principle underlying assessment in schools?

1. Identifying learning needs of children
2. Making it integral to the teaching learning process
3. Making it multiple evidence based
4. Making students serious about their learning

Question Number : 37 Question Id : 668622203 Question Type : MCQ Option Shuffling : No Negative Marks Display Text : 1/4  
Correct Marks : 2 Wrong Marks : 0.5

निम्न में से कौन-सा विद्यालय का आकलन-नियम नहीं है?

1. विद्यार्थियों की अधिगम आवश्यकताओं की पहचान करना
2. इसे शिक्षण-अधिगम प्रक्रिया से जोड़ना
3. इसे बहु-प्रमाण आधारित करना
4. अधिगम के प्रति विद्यार्थियों को गंभीर बनाना

Question Number : 38 Question Id : 668622204 Question Type : MCQ Option Shuffling : No Negative Marks Display Text : 1/4  
Correct Marks : 2 Wrong Marks : 0.5

Practice is more emphasized in which of the following methods?

1. Inductive method
2. Lecture method
3. Drill method
4. Demonstration method

Question Number : 38 Question Id : 668622204 Question Type : MCQ Option Shuffling : No Negative Marks Display Text : 1/4  
Correct Marks : 2 Wrong Marks : 0.5

निम्न विधियों में से किस में अभ्यास को अधिक महत्व दिया जाता है ?

1. निगमन विधि
2. व्याख्यान विधि
3. ड्रिल विधि
4. प्रदर्शन विधि

Question Number : 39 Question Id : 668622205 Question Type : MCQ Option Shuffling : No Negative Marks Display Text : 1/4  
Correct Marks : 2 Wrong Marks : 0.5

Which of the following is not true about competency-based learning?

1. Assessment will shift its focus from summative to formative
2. Learning will shift its focus from rote memorization to conceptual clarity
3. It will promote higher order skills such as analysis and critical thinking
4. It will add to curricular load of students

Question Number : 39 Question Id : 668622205 Question Type : MCQ Option Shuffling : No Negative Marks Display Text : 1/4  
Correct Marks : 2 Wrong Marks : 0.5

दक्षता आधारित अधिगम के संबंध में निम्न में से कौन-सा सही नहीं है?

1. योगात्मक की बजाय रचनात्मक आकलन की ओर अधिक ध्यान दिया जाएगा
2. अधिगम को रटकर याद रखने की बजाय स्पष्ट अवधारणा की ओर ले जाया जाएगा
3. यह विश्लेषण और गंभीर चिंतन जैसे उच्चतम कौशलों का विकास करेगा
4. यह विद्यार्थी पर पाठ्यचर्या में अधिक भार बढ़ाएगा

Question Number : 40 Question Id : 668622206 Question Type : MCQ Option Shuffling : No Negative Marks Display Text : 1/4  
Correct Marks : 2 Wrong Marks : 0.5

Which of the following is not an example of experiential learning?

1. Visit to a museums
2. Visit to an institute of science
3. Listening to a talk delivered by eminent scholars
4. Survey of income and savings of households in local community

Question Number : 40 Question Id : 668622206 Question Type : MCQ Option Shuffling : No Negative Marks Display Text : 1/4  
Correct Marks : 2 Wrong Marks : 0.5

निम्नलिखित में से कौन-सा अनुभवजन्य अधिगम का उदाहरण नहीं है?

1. संग्रहालय का परिदर्शन
2. किसी विज्ञान संस्थान का परिदर्शन
3. प्रसिद्ध विद्वानों का भाषण सुनना
4. स्थानीय लोगों की आय और बचत का सर्वेक्षण करना

Question Number : 41 Question Id : 668622207 Question Type : MCQ Option Shuffling : No Negative Marks Display Text : 1/4  
Correct Marks : 2 Wrong Marks : 0.5

Which of the following is an external factor affecting learning of a student?

1. Emotions
2. Culture
3. Attitude
4. Motives

Question Number : 41 Question Id : 668622207 Question Type : MCQ Option Shuffling : No Negative Marks Display Text : 1/4  
Correct Marks : 2 Wrong Marks : 0.5

इनमें से कौन-सा विद्यार्थी के अधिगम को प्रभावित करने वाला बाह्य कारक है?

1. संवेग
2. संस्कृति
3. अभिवृत्ति
4. मकसद

Question Number : 42 Question Id : 668622208 Question Type : MCQ Option Shuffling : No Negative Marks Display Text : 1/4  
Correct Marks : 2 Wrong Marks : 0.5

An effective classroom environment basically envisages:

1. student-teacher interaction
2. pin-drop silence
3. strict discipline
4. a variety of costly teaching aids

Question Number : 42 Question Id : 668622208 Question Type : MCQ Option Shuffling : No Negative Marks Display Text : 1/4  
Correct Marks : 2 Wrong Marks : 0.5

एक प्रभावशाली कक्षा-परिवेश के लिए क्या अपेक्षित है?

1. विद्यार्थी-शिक्षक अंतःक्रिया
2. पूर्ण नीरवता
3. कठोर अनुशासन
4. विविध महंगे शिक्षण-उपकरण

Question Number : 43 Question Id : 668622209 Question Type : MCQ Option Shuffling : No Negative Marks Display Text : 1/4

Correct Marks : 2 Wrong Marks : 0.5

Which of the following is a teaching skill?

1. Asking questions
2. Writing on the Blackboard
3. Demonstrating teaching aids
4. All the above

Question Number : 43 Question Id : 668622209 Question Type : MCQ Option Shuffling : No Negative Marks Display Text : 1/4  
Correct Marks : 2 Wrong Marks : 0.5

निम्न में से कौन-सा शिक्षण कौशल है ?

1. प्रश्न पूछना
2. श्यामपट्ट पर लिखना
3. शिक्षण उपकरणों का प्रदर्शन
4. उपर्युक्त सभी

Question Number : 44 Question Id : 668622210 Question Type : MCQ Option Shuffling : No Negative Marks Display Text : 1/4  
Correct Marks : 2 Wrong Marks : 0.5

What should be the approach of a teacher to deal with the slow learners in a class?

1. Same as that for other students
2. Asking them to catch up with other students
3. Giving them more time to learn
4. Advising them to go for private coaching

Question Number : 44 Question Id : 668622210 Question Type : MCQ Option Shuffling : No Negative Marks Display Text : 1/4  
Correct Marks : 2 Wrong Marks : 0.5

धीमी गति से सीखने वाले विद्यार्थियों से निपटने के लिए शिक्षक क्या करेंगे?

1. वैसे ही, जैसा दूसरे विद्यार्थियों के लिए करते हैं
2. उन्हें दूसरे विद्यार्थियों के समताल से आगे बढ़ने को कहेंगे
3. अधिगम के लिए उन्हें अधिक समय देंगे
4. घरेलू ट्यूशन में जाने का सुझाव देंगे

Question Number : 45 Question Id : 668622211 Question Type : MCQ Option Shuffling : No Negative Marks Display Text : 1/4  
Correct Marks : 2 Wrong Marks : 0.5

Schools are called social institutions, because they:

1. are established by the society
2. function in the society
3. preserve and transmit knowledge to future generations
4. train students to become social workers

Question Number : 45 Question Id : 668622211 Question Type : MCQ Option Shuffling : No Negative Marks Display Text : 1/4  
Correct Marks : 2 Wrong Marks : 0.5

विद्यालयों को सामाजिक संस्था माना जाता है, क्योंकि वे :

1. समाज ने उनकी स्थापना की है
2. समाज में ही अपना कार्य निष्पादन करते हैं
3. भावी पीढ़ियों के लिए वे ज्ञान का संरक्षण और वितरण-प्रसारण करते हैं
4. विद्यार्थियों को सामाजिक कार्यकर्ता के रूप में प्रशिक्षण देते हैं

Question Number : 46 Question Id : 668622212 Question Type : MCQ Option Shuffling : No Negative Marks Display Text : 1/4  
Correct Marks : 2 Wrong Marks : 0.5

Which of the following is an example of a gross motor skill?

1. Hopping
2. Running
3. Climbing
4. All the above

Question Number : 46 Question Id : 668622212 Question Type : MCQ Option Shuffling : No Negative Marks Display Text : 1/4  
Correct Marks : 2 Wrong Marks : 0.5

इनमें से कौन-सा सकल मोटर कौशल का एक उदाहरण है?

1. फुदकना
2. दौड़ना
3. चढ़ना
4. उपर्युक्त सभी

Question Number : 47 Question Id : 668622213 Question Type : MCQ Option Shuffling : No Negative Marks Display Text : 1/4  
Correct Marks : 2 Wrong Marks : 0.5

Inclusive Education:

1. includes teachers from the marginalized sections
2. encourages selection of students through admission test
3. celebrates diversity in the classroom
4. includes children with disability only

Question Number : 47 Question Id : 668622213 Question Type : MCQ Option Shuffling : No Negative Marks Display Text : 1/4  
Correct Marks : 2 Wrong Marks : 0.5

समावेशी शिक्षा :

1. समाज में हाशिये पर स्थित वर्ग से शिक्षकों को अंतर्भुक्त करती है
2. प्रवेशिका परीक्षा के माध्यम से विद्यार्थियों के चयन को प्रोत्साहित करती है
3. कक्षा में विविधता की अपेक्षा रखती है
4. केवल शारीरिक अक्षमता वाले बच्चों को स्वीकार करती है

Question Number : 48 Question Id : 668622214 Question Type : MCQ Option Shuffling : No Negative Marks Display Text : 1/4  
Correct Marks : 2 Wrong Marks : 0.5

Which of the following is an objective type question?

1. Short answer question
2. Open ended question
3. Essay type question
4. Matching type question

Question Number : 48 Question Id : 668622214 Question Type : MCQ Option Shuffling : No Negative Marks Display Text : 1/4  
Correct Marks : 2 Wrong Marks : 0.5

निम्नलिखित में से कौन-सा वस्तुनिष्ठ प्रश्न है?

1. लघु उत्तरीय प्रश्न
2. दीर्घ उत्तरीय प्रश्न
3. निबंधात्मक प्रश्न
4. मिलान करने वाला प्रश्न

Question Number : 49 Question Id : 668622215 Question Type : MCQ Option Shuffling : No Negative Marks Display Text : 1/4  
Correct Marks : 2 Wrong Marks : 0.5

Which of the following is an effective method to enhance problem solving skills in children?

1. Focussing on the directions given by the teacher
2. Encouraging them to avoid difficult problems
3. Providing them with solutions to problems using Artificial Intelligence
4. Giving them opportunity to brainstorm and make intuitive guesses

Question Number : 49 Question Id : 668622215 Question Type : MCQ Option Shuffling : No Negative Marks Display Text : 1/4 Correct Marks : 2 Wrong Marks : 0.5

विद्यार्थियों में समस्या-समाधान कौशल का विकास करने के लिए इन में से कौन-सी विधि अधिक उपयुक्त है?

1. शिक्षक द्वारा दिए गए निर्देश की ओर अधिक ध्यान देना
2. उन्हें कठिन प्रश्नों से बचने को प्रोत्साहित करना
3. कृत्रिम बुद्धिमत्ता का प्रयोग करके उन्हें समस्याओं का समाधान प्रदान करना
4. बुद्धिशीलता से सहज अनुमान करने का अवसर प्रदान करना

Question Number : 50 Question Id : 668622216 Question Type : MCQ Option Shuffling : No Negative Marks Display Text : 1/4 Correct Marks : 2 Wrong Marks : 0.5

Which is the best way to tackle truancy?

1. To understand cause and find solution on a case-by-case basis
2. Maintaining attendance registers and having roll call for every period
3. Having strict rules for punishing learners who are frequent defaulters
4. Holding teachers responsible and accountable for resolving the issue

Question Number : 50 Question Id : 668622216 Question Type : MCQ Option Shuffling : No Negative Marks Display Text : 1/4 Correct Marks : 2 Wrong Marks : 0.5

अधिगम से बचने के लिए अनुपस्थिति की समस्या को सुलझाने का सर्वोत्तम तरीका क्या है?

1. हर मामले के कारण को अलग-अलग समझकर उसका समाधान निकालना
2. कक्षा-वार उपस्थान पंजिका में विद्यार्थियों की उपस्थिति दर्ज करना
3. आदतन चुपके-से खिसक जानेवाले या अनुपस्थित रहने वाले विद्यार्थियों को दंडित करने के लिए कठोर नियम बनाना
4. समस्या और उसके समाधान के लिए शिक्षक को उत्तरदायी करना

## Reasoning Ability

<b>Section Id :</b>	6686229
<b>Section Number :</b>	3
<b>Section type :</b>	Online
<b>Mandatory or Optional :</b>	Mandatory
<b>Number of Questions :</b>	30
<b>Number of Questions to be attempted :</b>	30
<b>Section Marks :</b>	60
<b>Section Negative Marks :</b>	0.5
<b>Maximum Instruction Time :</b>	0
<b>Sub-Section Number :</b>	1
<b>Sub-Section Id :</b>	66862218
<b>Question Shuffling Allowed :</b>	Yes

Question Number : 51 Question Id : 668622217 Question Type : MCQ Option Shuffling : No Negative Marks Display Text : 1/4  
Correct Marks : 2 Wrong Marks : 0.5

Which is the missing term in the following letter cluster series?

BEZ, DFY, EHX, GIW, HKV, JLU, ?

1. LNS
2. KMT
3. LMS
4. KNT

Question Number : 51 Question Id : 668622217 Question Type : MCQ Option Shuffling : No Negative Marks Display Text : 1/4  
Correct Marks : 2 Wrong Marks : 0.5

नीचे दिए गए अक्षर समूहों की शृंखला में कौन-सा अक्षर समूह नहीं है?

BEZ, DFY, EHX, GIW, HKV, JLU, ?

1. LNS
2. KMT
3. LMS
4. KNT

Question Number : 52 Question Id : 668622218 Question Type : MCQ Option Shuffling : No Negative Marks Display Text : 1/4  
Correct Marks : 2 Wrong Marks : 0.5

The two words given below are related in a certain way. Which of the options contain two words that are related the same way?

Poetry : Inspiration

1. Disease : Germs
2. Doctor : Treatment
3. Injury : Suffering
4. Racing : Car

Question Number : 52 Question Id : 668622218 Question Type : MCQ Option Shuffling : No Negative Marks Display Text : 1/4  
Correct Marks : 2 Wrong Marks : 0.5

नीचे दिए गए दो शब्द एक विशेष प्रकार से परस्पर संबन्धित हैं। किस विकल्प के दो शब्द उसी प्रकार से परस्पर संबन्धित हैं।

कविता : प्रेरणा

1. बीमारी : कीटाणु
2. डॉक्टर : इलाज
3. आघात : कष्ट
4. रेस लगाना : कार

Question Number : 53 Question Id : 668622219 Question Type : MCQ Option Shuffling : No Negative Marks Display Text : 1/4

Correct Marks : 2 Wrong Marks : 0.5

The numbers in the following triplet are related in a certain way. Which triplet has the numbers related the same way?

(4, 26, 9)

1. (8, 42, 12)
2. (3, 15, 6)
3. (4, 30, 8)
4. (9, 44, 13)

Question Number : 53 Question Id : 668622219 Question Type : MCQ Option Shuffling : No Negative Marks Display Text : 1/4  
Correct Marks : 2 Wrong Marks : 0.5

निम्न त्रिक में दी गई संख्याएँ एक विशेष प्रकार से परस्पर संबन्धित हैं। विकल्पों में से किस त्रिक की संख्याएँ उसी प्रकार से परस्पर संबन्धित हैं?

(4, 26, 9)

1. (8, 42, 12)
2. (3, 15, 6)
3. (4, 30, 8)
4. (9, 44, 13)

Question Number : 54 Question Id : 668622220 Question Type : MCQ Option Shuffling : No Negative Marks Display Text : 1/4  
Correct Marks : 2 Wrong Marks : 0.5

According to a coded rule of multiplication,  $9 \times 4 = 23$  and  $25 \times 16 = 45$ , then  $49 \times 36 = ?$

1. 67
2. 46
3. 59
4. 76

Question Number : 54 Question Id : 668622220 Question Type : MCQ Option Shuffling : No Negative Marks Display Text : 1/4  
Correct Marks : 2 Wrong Marks : 0.5

गुणन के एक कोडिकृत नियम के अनुसार  $9 \times 4 = 23$  और  $25 \times 16 = 45$ , तो  $49 \times 36 = ?$

1. 67
2. 46
3. 59
4. 76

Question Number : 55 Question Id : 668622221 Question Type : MCQ Option Shuffling : No Negative Marks Display Text : 1/4  
Correct Marks : 2 Wrong Marks : 0.5

A clock is so placed that at 10.30 pm, the hour hand points to East. Which direction will the minute hand point to?

1. North
2. West
3. South-West
4. North-West

Question Number : 55 Question Id : 668622221 Question Type : MCQ Option Shuffling : No Negative Marks Display Text : 1/4 Correct Marks : 2 Wrong Marks : 0.5

एक घड़ी इस प्रकार रखी गई है कि 10:30 pm पर घंटे वाली सुई पूरब की ओर संकेत करती है। उस समय मिनट की सुई किस दिशा की ओर होगी?

1. उत्तर
2. पश्चिम
3. दक्षिण-पश्चिम
4. उत्तर-पश्चिम

Question Number : 56 Question Id : 668622222 Question Type : MCQ Option Shuffling : No Negative Marks Display Text : 1/4 Correct Marks : 2 Wrong Marks : 0.5

Find the missing term in the following number series.

8, 18, 33, 59, ?, 144, 207, 289

1. 94
2. 96
3. 88
4. 103

Question Number : 56 Question Id : 668622222 Question Type : MCQ Option Shuffling : No Negative Marks Display Text : 1/4 Correct Marks : 2 Wrong Marks : 0.5

निम्न संख्या-शृंखला में अनुपस्थित संख्या को छांटिए।

8, 18, 33, 59, ?, 144, 207, 289

1. 94
2. 96
3. 88
4. 103

Question Number : 57 Question Id : 668622223 Question Type : MCQ Option Shuffling : No Negative Marks Display Text : 1/4  
Correct Marks : 2 Wrong Marks : 0.5

The two letter-clusters on the left of the sign ‘::’ are related in a particular way. The same relationship holds for the two letter-clusters on the right of the sign ‘::’ of which one is missing. Find the missing one.

DFHJ : TRPN :: BDFH : ?

1. NKHG
2. VTRP
3. LHFD
4. PRTV

Question Number : 57 Question Id : 668622223 Question Type : MCQ Option Shuffling : No Negative Marks Display Text : 1/4  
Correct Marks : 2 Wrong Marks : 0.5

‘::’ चिह्न की बाईं ओर के दो अक्षर समूह एक विशेष प्रकार से परस्पर संबन्धित हैं। ‘::’ चिह्न की दाहिनी ओर के दोनों अक्षर समूहों में भी परस्पर वही संबंध है, पर उनमें से एक गायब है। दिए गए विकल्पों में से उस गायब अक्षर समूह की पहचान कीजिए।

DFHJ : TRPN :: BDFH : ?

1. NKHG
2. VTRP
3. LHFD
4. PRTV

Question Number : 58 Question Id : 668622224 Question Type : MCQ Option Shuffling : No Negative Marks Display Text : 1/4  
Correct Marks : 2 Wrong Marks : 0.5

All the students in Class 10 are standing in a circle facing the center. Reeta is exactly facing Suman, who is 5<sup>th</sup> to the right of Pinky. Pinky is exactly facing Heena, who is 10<sup>th</sup> to the right of Suman. How many students are there in class 10?

1. 28
2. 30
3. 31
4. 32

Question Number : 58 Question Id : 668622224 Question Type : MCQ Option Shuffling : No Negative Marks Display Text : 1/4  
Correct Marks : 2 Wrong Marks : 0.5

कक्षा दस के सारे विद्यार्थी एक वृत्त में केंद्र की ओर मुंह करके खड़े हैं। रीता का मुँह सुमन की ओर है, जो पिकी की दाहिनी ओर पांचवें स्थान पर है। पिकी का मुँह हीना की ओर है, जो सुमन की दाहिनी ओर दसवें स्थान पर है। दसवीं कक्षा में कुल कितने विद्यार्थी हैं?

1. 28
2. 30
3. 31
4. 32

Question Number : 59 Question Id : 668622225 Question Type : MCQ Option Shuffling : No Negative Marks Display Text : 1/4

Correct Marks : 2 Wrong Marks : 0.5

The following three items are related in a certain way. Which of the options contain three items related the same way?

Run : Walk : Jog

1. Play, Games, Match
2. Note, Write, Book
3. Sing, Recite, Speak
4. Sleep, Dream, Awake

Question Number : 59 Question Id : 668622225 Question Type : MCQ Option Shuffling : No Negative Marks Display Text : 1/4  
Correct Marks : 2 Wrong Marks : 0.5

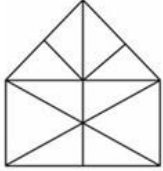
नीचे दिए गए तीन शब्द परस्पर एक विशेष प्रकार से संबन्धित हैं। कौन-से विकल्प के शब्द परस्पर उसी प्रकार से संबन्धित हैं?

दौड़ना : चलना : कूदना

1. खेल, खेल-कूद, मैच
2. टिप्पणी, लिखना, पुस्तक
3. गाना, आवृत्ति करना, बोलना
4. सोना, स्वप्न देखना, नींद से जागना

Question Number : 60 Question Id : 668622226 Question Type : MCQ Option Shuffling : No Negative Marks Display Text : 1/4  
Correct Marks : 2 Wrong Marks : 0.5

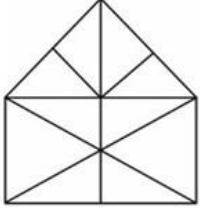
How many triangles are there in the following figure?



1. 23
2. 21
3. 19
4. 17

Question Number : 60 Question Id : 668622226 Question Type : MCQ Option Shuffling : No Negative Marks Display Text : 1/4  
Correct Marks : 2 Wrong Marks : 0.5

निम्न आरेख में कितने त्रिकोण हैं?



1. 23
2. 21
3. 19
4. 17

Question Number : 61 Question Id : 66862227 Question Type : MCQ Option Shuffling : No Negative Marks Display Text : 1/4  
Correct Marks : 2 Wrong Marks : 0.5

Which term will come next in the following alphanumeric series?

A4C, D11G, H20L, M31R, ?

1. S42Z
2. S44Y
3. T42Y
4. S44X

Question Number : 61 Question Id : 66862227 Question Type : MCQ Option Shuffling : No Negative Marks Display Text : 1/4  
Correct Marks : 2 Wrong Marks : 0.5

निम्न अल्फान्युमेरिक शृंखला में अगले स्थान पर किस विकल्प को रखा जाएगा ?

A4C, D11G, H20L, M31R, ?

1. S42Z
2. S44Y
3. T42Y
4. S44X

Question Number : 62 Question Id : 66862228 Question Type : MCQ Option Shuffling : No Negative Marks Display Text : 1/4  
Correct Marks : 2 Wrong Marks : 0.5

Select the option that is related to the third term the same way as the second term is related to the first term, and the sixth term is related to the fifth term.

8 : 48 :: 11 : ? :: 14 : 168

1. 99
2. 82
3. 108
4. 112

Question Number : 62 Question Id : 66862228 Question Type : MCQ Option Shuffling : No Negative Marks Display Text : 1/4  
Correct Marks : 2 Wrong Marks : 0.5

एक विकल्प चुनिए जो तीसरे पद के साथ वैसे ही संबन्धित हो जैसे कि दूसरा पद प्रथम से और छठा पद पांचवें पद से संबन्धित है।

8 : 48 :: 11 : ? :: 14 : 168

1. 99
2. 82
3. 108
4. 112

Question Number : 63 Question Id : 668622229 Question Type : MCQ Option Shuffling : No Negative Marks Display Text : 1/4  
Correct Marks : 2 Wrong Marks : 0.5

Eight persons designated alphabetically from A to H are sitting around a circular table facing the center. A is facing G, who is an immediate neighbor of B and C. D is second to the right of B, but is not a neighbor of E. E is neither a neighbor of F nor is facing F.

Which of the statements is correct?

1. B is facing D
2. H is third to the right of B
3. C and F are separated by two persons.
4. F is second to the right of D

Question Number : 63 Question Id : 668622229 Question Type : MCQ Option Shuffling : No Negative Marks Display Text : 1/4  
Correct Marks : 2 Wrong Marks : 0.5

A से H तक अक्षरों से नामित आठ व्यक्ति एक गोलाकार मेज की चारों ओर केंद्र की ओर मुँह करके बैठे हैं। A का मुँह G की ओर है, जोकि B और C का ठीक पड़ोसी है। D, B कि दाईं ओर दूसरे स्थान पर है, पर E का पड़ोसी नहीं है। E न तो F का पड़ोसी है और न F की ओर मुँह करता है।

निम्न विकल्पों में से सही कथन को छांटिए।

1. B का मुँह D की ओर है
2. H का स्थान B की दाईं ओर तीसरा है
3. C और F के बीच में दो व्यक्ति बैठे हैं
4. F का स्थान D की दाईं ओर दूसरा है

Question Number : 64 Question Id : 668622230 Question Type : MCQ Option Shuffling : No Negative Marks Display Text : 1/4  
Correct Marks : 2 Wrong Marks : 0.5

Three of the following four terms are alike in a certain way and one is different. Find the odd one.

1. JQWD
2. FUSH
3. VEKP
4. CXTF

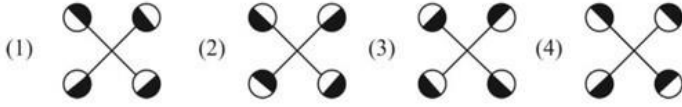
Question Number : 64 Question Id : 668622230 Question Type : MCQ Option Shuffling : No Negative Marks Display Text : 1/4  
Correct Marks : 2 Wrong Marks : 0.5

नीचे दिए गए चार में से तीन पद एक विशेष प्रकार से परस्पर एक जैसे हैं, पर एक भिन्न है। उस भिन्न पद को छांटिए।

1. JQWD
2. FUSH
3. VEKP
4. CXTF

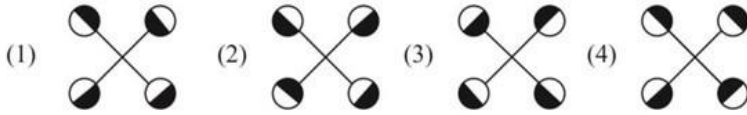
Question Number : 65 Question Id : 668622231 Question Type : MCQ Option Shuffling : No Negative Marks Display Text : 1/4 Correct Marks : 2 Wrong Marks : 0.5

Three of the four figures are alike in a certain way and one is different. Find the odd one.



Question Number : 65 Question Id : 668622231 Question Type : MCQ Option Shuffling : No Negative Marks Display Text : 1/4 Correct Marks : 2 Wrong Marks : 0.5

नीचे दिए गए चार में से तीन आरेख एक विशेष प्रकार से परस्पर एक जैसे हैं, पर एक भिन्न है। उस भिन्न आरेख को छांटिए।



Question Number : 66 Question Id : 668622232 Question Type : MCQ Option Shuffling : No Negative Marks Display Text : 1/4 Correct Marks : 2 Wrong Marks : 0.5

In a software company, 20% of male employees and 25% of the female employees are executives. The ratio of the male to female employees in the company is 3 : 4. Approximately what percentage of the employees of the company are non-executives?

1. 57%
2. 73%
3. 77%
4. 82%


Question Number : 66 Question Id : 668622232 Question Type : MCQ Option Shuffling : No Negative Marks Display Text : 1/4 Correct Marks : 2 Wrong Marks : 0.5

एक सॉफ्टवेयर कंपनी में 20% पुरुष कर्मचारी और 25% महिला कर्मचारी अधिकारी हैं। कंपनी में महिला और पुरुष कर्मचारियों का अनुपात 3:4 है। कंपनी में लगभग कितने प्रतिशत कर्मचारी अधिकारी नहीं हैं?

1. 57%
2. 73%
3. 77%
4. 82%

Question Number : 67 Question Id : 668622233 Question Type : MCQ Option Shuffling : No Negative Marks Display Text : 1/4 Correct Marks : 2 Wrong Marks : 0.5


Three positions of a cube with dots on its faces are shown below. If the face with 6 dots is at the top, how many dots will be on the bottom face?



- 1
- 4
- 5
- 3

Question Number : 67 Question Id : 668622233 Question Type : MCQ Option Shuffling : No Negative Marks Display Text : 1/4 Correct Marks : 2 Wrong Marks : 0.5

नीचे एक घनाकार गोटी की तीन स्थितियां दी गई हैं। यदि 6 बिन्दु वाला पट ऊपर की ओर हो, तो उसके नीचे वाले पट पर कितने बिन्दु होंगे?



- 1
- 4
- 5
- 3

Question Number : 68 Question Id : 668622234 Question Type : MCQ Option Shuffling : No Negative Marks Display Text : 1/4  
Correct Marks : 2 Wrong Marks : 0.5

Three of the following four numbers are alike in a certain way and one is different. Find the odd number.

1. 4205
2. 5357
3. 3219
4. 6427

Question Number : 68 Question Id : 668622234 Question Type : MCQ Option Shuffling : No Negative Marks Display Text : 1/4  
Correct Marks : 2 Wrong Marks : 0.5

नीचे दिए गए चार में से तीन संख्याएँ एक विशेष प्रकार से परस्पर एक जैसे हैं, पर एक भिन्न है। उस भिन्न संख्या को छांटिए।

1. 4205
2. 5357
3. 3219
4. 6427

Question Number : 69 Question Id : 668622235 Question Type : MCQ Option Shuffling : No Negative Marks Display Text : 1/4  
Correct Marks : 2 Wrong Marks : 0.5

Four pairs of words are given below. In three of the pairs, the two words have similar relationship while one is different. Find the odd pair out.

1. Car : Wheel
2. Water : Boat
3. Pencil : Lead
4. Monkey : Tail

Question Number : 69 Question Id : 668622235 Question Type : MCQ Option Shuffling : No Negative Marks Display Text : 1/4  
Correct Marks : 2 Wrong Marks : 0.5

नीचे शब्दों के चार जोड़े दिए गए हैं जिनमें से तीन के दोनों शब्द परस्पर एक विशेष प्रकार से संबन्धित हैं, पर एक भिन्न है; उस भिन्न जोड़े को छांटिए।

1. कार : पहिया
2. पानी : नाव
3. पेंसिल : लीड
4. बंदर : पूंछ

Question Number : 70 Question Id : 668622236 Question Type : MCQ Option Shuffling : No Negative Marks Display Text : 1/4

Correct Marks : 2 Wrong Marks : 0.5

Clock A goes faster by 6 minutes per hour. Clock B goes slower by 6 minutes per hour. If both the clocks are set at 9 am on Monday, when will the clocks be exactly 12 hours apart?

1. 9 pm Wednesday
2. 9 am Thursday
3. 9 am Wednesday
4. 9 pm Thursday

Question Number : 70 Question Id : 668622236 Question Type : MCQ Option Shuffling : No Negative Marks Display Text : 1/4 Correct Marks : 2 Wrong Marks : 0.5

घड़ी A 6 मिनट प्रति घंटा आगे चलती है और घड़ी B प्रति घंटा 6 मिनट पीछे चलती है। यदि दोनों घड़ियाँ सोमवार को सुबह 9 बजे सही स्थिति में रख दी जाएँ, तो दोनों घड़ियों में ठीक 12 घंटों का अंतर कब रहेगा?

1. बुधवार 9 pm
2. गुरुवार 9 am
3. बुधवार 9 am
4. गुरुवार 9 pm

Question Number : 71 Question Id : 668622237 Question Type : MCQ Option Shuffling : No Negative Marks Display Text : 1/4 Correct Marks : 2 Wrong Marks : 0.5

How many times in the following number sequence, a number is immediately followed by a number divisible by 3, but is not immediately preceded by an odd number?

21, 16, 39, 45, 18, 30, 24, 18, 36, 29, 15, 27, 33, 21, 24, 36, 30

1. 4
2. 5
3. 6
4. 7

Question Number : 71 Question Id : 668622237 Question Type : MCQ Option Shuffling : No Negative Marks Display Text : 1/4 Correct Marks : 2 Wrong Marks : 0.5

निम्न संख्या-अनुक्रम में कितनी बार ऐसी एक संख्या आती है जिसके ठीक बाद 3 से विभाज्य एक संख्या आती है पर उसके ठीक पहले कोई विषम संख्या नहीं है।

21, 16, 39, 45, 18, 30, 24, 18, 36, 29, 15, 27, 33, 21, 24, 36, 30

1. 4
2. 5
3. 6
4. 7

Question Number : 72 Question Id : 668622238 Question Type : MCQ Option Shuffling : No Negative Marks Display Text : 1/4  
Correct Marks : 2 Wrong Marks : 0.5

Three of the four words given in the options are alike in a certain way and one is different. Find the odd one.

1. Kilogram
2. Litre
3. Centimetre
4. Gallon

Question Number : 72 Question Id : 668622238 Question Type : MCQ Option Shuffling : No Negative Marks Display Text : 1/4  
Correct Marks : 2 Wrong Marks : 0.5

नीचे दिए गए विकल्पों में से तीन शब्द परस्पर एक विशेष प्रकार से एक जैसे हैं; पर एक भिन्न है। उस भिन्न शब्द को छांटिए।

1. किलोग्राम
2. लीटर
3. सेंटीमीटर
4. गैलन

Question Number : 73 Question Id : 668622239 Question Type : MCQ Option Shuffling : No Negative Marks Display Text : 1/4  
Correct Marks : 2 Wrong Marks : 0.5

Four persons Ara, Bihu, Camu, Dick living in four places Agra, Banaras, Calcutta and Delhi are Accountant, Businessman, Collector, and Doctor. No person's name starts with the first letter of his profession or place of living.

- i. Ara is not the Collector nor lives in Delhi.
- ii. Bihu is not the Doctor nor lives in Calcutta.
- iii. Camu is the Account and lives in Banaras.

Who is the businessman and where does he live?

1. Ara in Calcutta
2. Dick in Delhi
3. Bihu in Delhi
4. Dick in Agra

Question Number : 73 Question Id : 668622239 Question Type : MCQ Option Shuffling : No Negative Marks Display Text : 1/4 Correct Marks : 2 Wrong Marks : 0.5

आगरा, बनारस, कोलकाता और दिल्ली में आरा, बीहू, कैमू और डिक नाम के चार लोग रहते हैं जो लेखाकार, व्यापारी, कलक्टर और डॉक्टर हैं। किसी भी व्यक्ति का नाम उसकी आजीविका या निवास स्थान के अंग्रेजी नाम के प्रथम अक्षर से नहीं है।

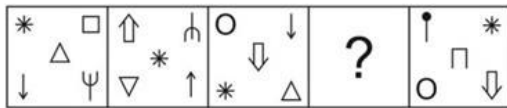
- i. आरा न कलक्टर है और न दिल्ली में रहती है
- ii. बीहू न डॉक्टर है और न कोलकाता में रहता है
- iii. कैमू लेखाकार है और बनारस में रहता है

तो इनमें से व्यापारी कौन है और वह कहाँ रहता है?

- 1. आरा कोलकाता में
- 2. डिक दिल्ली में
- 3. बीहू दिल्ली में
- 4. डिक आगरा में

Question Number : 74 Question Id : 668622240 Question Type : MCQ Option Shuffling : No Negative Marks Display Text : 1/4 Correct Marks : 2 Wrong Marks : 0.5

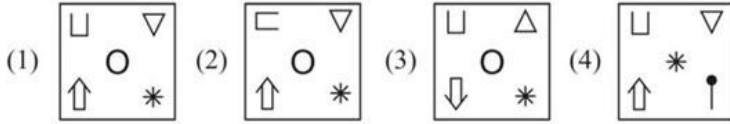
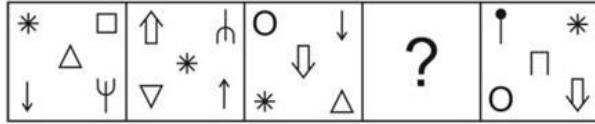
Which is the missing figure in the following figure series?



- (1)
- (2)
- (3)
- (4)

Question Number : 74 Question Id : 668622240 Question Type : MCQ Option Shuffling : No Negative Marks Display Text : 1/4 Correct Marks : 2 Wrong Marks : 0.5

निम्न आरेख शृंखला में कौन-सा आरेख नहीं है?



Question Number : 75 Question Id : 668622241 Question Type : MCQ Option Shuffling : No Negative Marks Display Text : 1/4 Correct Marks : 2 Wrong Marks : 0.5

A statement is followed by two reasons numbered I and II. Find out which of the reasons is/are behind the assumption.

Statement

Whenever people are stressed and apprehensive of their future, many of them rush to astrologers with their horoscopes.

Reasons

- I. All people believe that their misfortunes depend on the positions of the planets.
- II. Some people have deep faith in astrology.

- 1. Only I is the reason
- 2. Only II is the reason
- 3. Both I and II are the reasons
- 4. Neither I nor II is the reason

Question Number : 75 Question Id : 668622241 Question Type : MCQ Option Shuffling : No Negative Marks Display Text : 1/4 Correct Marks : 2 Wrong Marks : 0.5

एक कथन के बाद दो कारण I और II दिए गए हैं। यह बताइए कि उस मान्यता के पीछे कौन-सा/से कारण निहित हैं।  
कथन : तनावग्रस्त और भविष्य के बारे में आशंकित होने पर बहुत लोग अपनी जन्म-कुंडली लेकर ज्योतिष के पास भागते हैं।

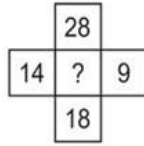
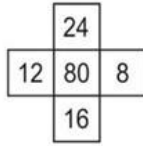
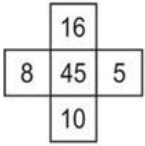
कारण :

- I. सभी लोगों को विश्वास है कि हमारी बदकिस्मती कुंडली में ग्रहों की स्थिति पर निर्भर करती है।
- II. कई लोगों को ज्योतिष-शास्त्र में गहरा विश्वास है।

1. केवल I कारण है
2. केवल II कारण है
3. I और II दोनों कारण है
4. I और II दोनों में से कोई भी कारण नहीं है

Question Number : 76 Question Id : 668622242 Question Type : MCQ Option Shuffling : No Negative Marks Display Text : 1/4 Correct Marks : 2 Wrong Marks : 0.5

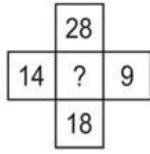
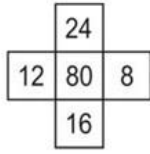
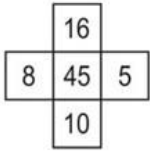
The numbers in the following figures follow a pattern. Find the missing number.



1. 112
2. 91
3. 144
4. 125

Question Number : 76 Question Id : 668622242 Question Type : MCQ Option Shuffling : No Negative Marks Display Text : 1/4 Correct Marks : 2 Wrong Marks : 0.5

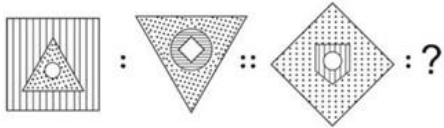
निम्न आरेखों में दी गई संख्याएँ एक विशेष प्रणाली (पैटर्न) का अनुसरण करती हैं। दिए गए विकल्पों में से छूटी हुई संख्या को छांटिए।



1. 112
2. 91
3. 144
4. 125

Question Number : 77 Question Id : 668622243 Question Type : MCQ Option Shuffling : No Negative Marks Display Text : 1/4 Correct Marks : 2 Wrong Marks : 0.5

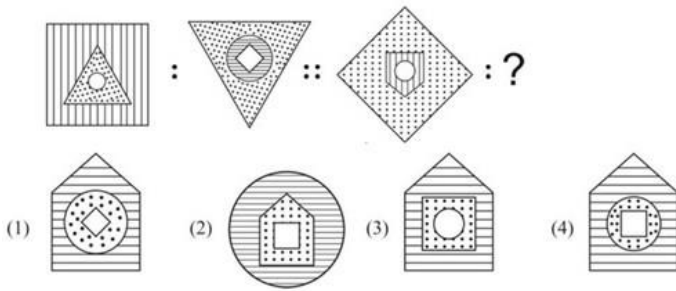
The two figures on the left of ‘::’ are related in a certain way. The two figures on the right of ‘::’ are related the same way but one of the figures is missing. Find the missing figure from the options.



- (1) (2) (3) (4)

Question Number : 77 Question Id : 668622243 Question Type : MCQ Option Shuffling : No Negative Marks Display Text : 1/4 Correct Marks : 2 Wrong Marks : 0.5

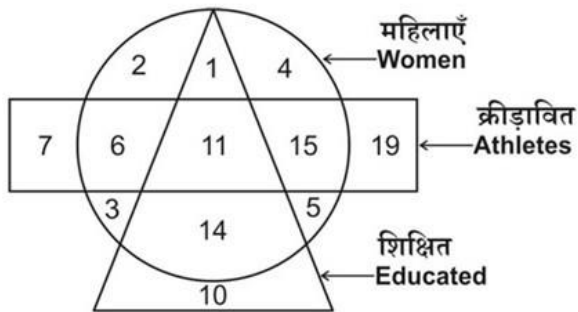
‘:.’ की बाईं ओर दो आकृतियाँ परस्पर किसी विशेष प्रकार से संबंधित हैं। ‘:.’ की दाईं ओर वाली दो आकृतियाँ भी परस्पर उसी प्रकार से संबंधित हैं, लेकिन उनमें से एक अनुपस्थित है। विकल्पों में से अनुपस्थित आकृति को छाँटिए।



Question Number : 78 Question Id : 668622244 Question Type : MCQ Option Shuffling : No Negative Marks Display Text : 1/4 Correct Marks : 2 Wrong Marks : 0.5

The following diagram shows different categories of people. The numbers in different sections indicate the number of persons.

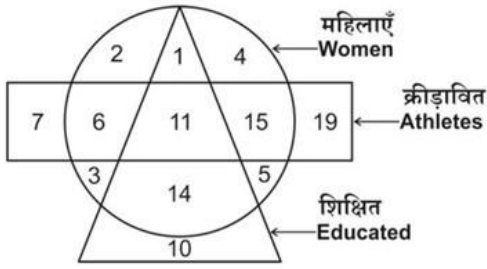
How many uneducated women are athletes?



1. 11
2. 19
3. 21
4. 23

Question Number : 78 Question Id : 668622244 Question Type : MCQ Option Shuffling : No Negative Marks Display Text : 1/4 Correct Marks : 2 Wrong Marks : 0.5

निम्न आरेख विभिन्न वर्गों के लोगों को दर्शाता है। विभिन्न अनुभागों में संख्याएँ लोगों की संख्या को सूचित करती हैं। यह बताइए कि कितनी अशिक्षित महिलाएँ क्रीड़ावित हैं।



1. 11
2. 19
3. 21
4. 23

Question Number : 79 Question Id : 668622245 Question Type : MCQ Option Shuffling : No Negative Marks Display Text : 1/4 Correct Marks : 2 Wrong Marks : 0.5

In a family of eight persons with two couples, each having two children, A and B are cousin brothers. The father of C is married to E, who is the aunt of F. F's mother G is married to H, the brother of D. C is the nephew of G and brother of A. How is D related to B?

1. Father
2. Uncle
3. Nephew
4. Brother

Question Number : 79 Question Id : 668622245 Question Type : MCQ Option Shuffling : No Negative Marks Display Text : 1/4  
Correct Marks : 2 Wrong Marks : 0.5

आठ लोगों वाले एक परिवार में दो दंपति हैं, जिनकी दो-दो सन्तानें हैं। A और B चचेरे भाई हैं। C के पिता की शादी E से हुई है, जो F की चाची/ताई हैं। F की माँ G की शादी H से हुई है, जो D के भाई हैं। C, G का भतीजा और A का भाई है। D, B का क्या लगता है?

1. पिता
2. चाचा
3. भतीजा
4. भाई

Question Number : 80 Question Id : 668622246 Question Type : MCQ Option Shuffling : No Negative Marks Display Text : 1/4  
Correct Marks : 2 Wrong Marks : 0.5

Three statements are followed by three conclusions Assuming the statements to be true, decide which of the conclusion(s) logically follow(s).

Statements: 1. Some buses are vehicles.  
2. Some locomotives are ships.  
3. All vehicles are locomotives.

Conclusions: I. No ship is vehicle.  
II. Some locomotives are buses.  
III. Some ships are vehicles.

1. Only I follows
2. Only I and II follow
3. Only II and either I or III follow
4. Either I or III follows.

तीन कथनों के बाद तीन निष्कर्ष दिए गए हैं। कथनों को सही मानते हुए बताइए कि कौन-सा/से निष्कर्ष तर्कसंगत लगते हैं।

कथन :

1. कुछ बसें वाहन हैं
2. कुछ स्व-चालित इंजन जहाज हैं
3. सभी वाहन स्वचालित इंजन हैं

निष्कर्ष:

- I. कोई जहाज वाहन नहीं है
- II. कुछ स्वचालित इंजन बसें हैं
- III. कुछ जहाज वाहन हैं

1. केवल I अनुसरण करता है
2. केवल I और II अनुसरण करते हैं
3. केवल II तथा I या III में से कोई एक अनुसरण करता है
4. I या III अनुसरण करता है